

The following problems ask you to prove some “obvious” claims about recursively-defined string functions. In each case, we want a self-contained, step-by-step induction proof that builds on formal definitions and prior results, *not* on intuition. In particular, your proofs must refer to the formal recursive definitions of string length and string concatenation:

$$|w| := \begin{cases} 0 & \text{if } w = \varepsilon \\ 1 + |x| & \text{if } w = ax \text{ for some symbol } a \text{ and some string } x \end{cases}$$

$$w \cdot z := \begin{cases} z & \text{if } w = \varepsilon \\ a \cdot (x \cdot z) & \text{if } w = ax \text{ for some symbol } a \text{ and some string } x \end{cases}$$

You may freely use the following results, which are proved in the lecture notes:

Lemma 1: $w \cdot \varepsilon = w$ for all strings w .

Lemma 2: $|w \cdot x| = |w| + |x|$ for all strings w and x .

Lemma 3: $(w \cdot x) \cdot y = w \cdot (x \cdot y)$ for all strings w , x , and y .

The *reversal* w^R of a string w is defined recursively as follows:

$$w^R := \begin{cases} \varepsilon & \text{if } w = \varepsilon \\ x^R \cdot a & \text{if } w = ax \text{ for some symbol } a \text{ and some string } x \end{cases}$$

For example, $\text{STRESSED}^R = \text{DESSERTS}$ and $\text{WTF374}^R = 473FTW$.

1. Prove that $|w| = |w^R|$ for every string w .
2. Prove that $(w \cdot z)^R = z^R \cdot w^R$ for all strings w and z .
3. Prove that $(w^R)^R = w$ for every string w .

[Hint: The proof for problem 3 relies on problem 2, but you may find it easier to solve problem 3 first.]

To think about later: Let $\#(a, w)$ denote the number of times symbol a appears in string w . For example, $\#(X, \text{WTF374}) = 0$ and $\#(0, 000010101010010100) = 12$.

4. Give a formal recursive definition of $\#(a, w)$.
5. Prove that $\#(a, w \cdot z) = \#(a, w) + \#(a, z)$ for all symbols a and all strings w and z .
6. Prove that $\#(a, w^R) = \#(a, w)$ for all symbols a and all strings w .

Give regular expressions for each of the following languages over the binary alphabet $\{0, 1\}$.

1. All strings containing the substring 000.
2. All strings *not* containing the substring 000.
3. All strings in which every run of 0s has length at least 3.
4. All strings in which all the 1s appear before any substring 000.
5. All strings containing at least three 0s.
6. Every string except 000. [Hint: Don't try to be clever.]

Work on these later:

7. All strings w such that *in every prefix of w* , the number of 0s and 1s differ by at most 1.
- *8. All strings containing at least two 0s and at least one 1.
- *9. All strings w such that *in every prefix of w* , the number of 0s and 1s differ by at most 2.
- ★10. All strings in which the substring 000 appears an even number of times.
(For example, 0001000 and 0000 are in this language, but 00000 is not.)

Describe deterministic finite-state automata that accept each of the following languages over the alphabet $\Sigma = \{0, 1\}$. Describe briefly what each state in your DFAs *means*. Yes, these are exactly the same languages that you saw last Friday.

Either drawings or formal descriptions are acceptable, as long as the states Q , the start state s , the accept states A , and the transition function δ are all be clear. Try not to use too many states, but *don't* try to use as few states as possible.

1. All strings containing the substring 000.
2. All strings *not* containing the substring 000.
3. All strings in which every run of 0s has length at least 3.
4. All strings in which all the 1s appear before any substring 000.
5. All strings containing at least three 0s.
6. Every string except 000. [*Hint: Don't try to be clever.*]

Work on these later:

7. All strings w such that *in every prefix of w* , the number of 0s and 1s differ by at most 1.
8. All strings containing at least two 0s and at least one 1.
9. All strings w such that *in every prefix of w* , the number of 0s and 1s differ by at most 2.
- *10. All strings in which the substring 000 appears an even number of times.
(For example, 0001000 and 0000 are in this language, but 00000 is not.)

Describe deterministic finite-state automata that accept each of the following languages over the alphabet $\Sigma = \{0, 1\}$. You may find it easier to describe these DFAs formally than to draw pictures.

Either drawings or formal descriptions are acceptable, as long as the states Q , the start state s , the accept states A , and the transition function δ are all clear. Try to keep the number of states small.

1. All strings in which the number of 0s is even **and** the number of 1s is *not* divisible by 3.
2. All strings in which the number of 0s is even **or** the number of 1s is *not* divisible by 3.
3. All strings that are **both** the binary representation of an integer divisible by 3 **and** the ternary (base-3) representation of an integer divisible by 4.

For example, the string 1100 is an element of this language, because it represents $2^3 + 2^2 = 12$ in binary and $3^3 + 3^2 = 36$ in ternary.

Work on these later:

3. All strings in which the subsequence 0101 appears an even number of times.
4. All strings w such that $\binom{|w|}{2} \bmod 6 = 4$.
[Hint: Maintain both $\binom{|w|}{2} \bmod 6$ and $|w| \bmod 6$.]
[Hint: $\binom{n+1}{2} = \binom{n}{2} + n$.]
- *5. All strings w such that $F_{\#(10, w)} \bmod 10 = 4$, where $\#(10, w)$ denotes the number of times 10 appears as a substring of w , and F_n is the n th Fibonacci number:

$$F_n = \begin{cases} 0 & \text{if } n = 0 \\ 1 & \text{if } n = 1 \\ F_{n-1} + F_{n-2} & \text{otherwise} \end{cases}$$

Prove that each of the following languages is *not* regular.

1. $\{\epsilon^{2^n} \mid n \geq 0\}$
2. $\{\epsilon^{2n}1^n \mid n \geq 0\}$
3. $\{\epsilon^m1^n \mid m \neq 2n\}$
4. Strings over $\{\epsilon, 1\}$ where the number of ϵ s is exactly twice the number of 1s.
5. Strings of properly nested parentheses $()$, brackets $[]$, and braces $\{\}$. For example, the string $([])\{\}$ is in this language, but the string $([])$ is not, because the left and right delimiters don't match.

Work on these later:

6. Strings of the form $w_1\#w_2\#\cdots\#w_n$ for some $n \geq 2$, where each substring w_i is a string in $\{\epsilon, 1\}^*$, and some pair of substrings w_i and w_j are equal.
7. $\{\epsilon^{n^2} \mid n \geq 0\}$
8. $\{w \in (\epsilon + 1)^* \mid w \text{ is the binary representation of a perfect square}\}$

1.
 - (a) Convert the regular expression $(0^*1 + 01^*)^*$ into an NFA using Thompson's algorithm.
 - (b) Convert the NFA you just constructed into a DFA using the incremental subset construction. Draw the resulting DFA. Your DFA should have four states, all reachable from the start state. (Some of these states are obviously equivalent, but keep them separate.)
 - (c) **Think about later:** Convert the DFA you constructed in part (b) into a regular expression using Han and Wood's algorithm. You should *not* get the same regular expression you started with.
 - (d) **Think about later:** Find the smallest DFA that is equivalent to your DFA from part (b) and convert that smaller DFA into a regular expression using Han and Wood's algorithm. Again, you should *not* get the same regular expression you started with.
 - (e) What is this language?
2.
 - (a) Convert the regular expression $(\epsilon + (0 + 11)^*0)1(11)^*$ into an NFA using Thompson's algorithm.
 - (b) Convert the NFA you just constructed into a DFA using the incremental subset construction. Draw the resulting DFA. Your DFA should have six states, all reachable from the start state. (Some of these states are obviously equivalent, but keep them separate.)
 - (c) **Think about later:** Convert the DFA you constructed in part (b) into a regular expression using Han and Wood's algorithm. You should *not* get the same regular expression you started with.
 - (d) **Think about later:** Find the smallest DFA that is equivalent to your DFA from part (b), using Moore's algorithm (in Section 3.10 of the notes), and convert that smaller DFA into a regular expression using Han and Wood's algorithm. Again, you should *not* get the same regular expression you started with.
 - (e) What is this language?

Consider the following recursively defined function on strings:

$$\text{stutter}(w) := \begin{cases} \varepsilon & \text{if } w = \varepsilon \\ aa \cdot \text{stutter}(x) & \text{if } w = ax \text{ for some symbol } a \text{ and some string } x \end{cases}$$

Intuitively, $\text{stutter}(w)$ doubles every symbol in w . For example:

- $\text{stutter}(\text{PRESTO}) = \text{PPRREESSTTTOO}$
- $\text{stutter}(\text{HOCUS} \diamond \text{POCUS}) = \text{HHOOCCUUSS} \diamond \text{PPOOCCUUSS}$

Let L be an arbitrary regular language.

1. Prove that the language $\text{stutter}^{-1}(L) := \{w \mid \text{stutter}(w) \in L\}$ is regular.
2. Prove that the language $\text{stutter}(L) := \{\text{stutter}(w) \mid w \in L\}$ is regular.

Work on these later:

3. Let L be an arbitrary regular language.
 - (a) Prove that the language $\text{insert}1(L) := \{x1y \mid xy \in L\}$ is regular.
Intuitively, $\text{insert}1(L)$ is the set of all strings that can be obtained from strings in L by inserting exactly one **1**. For example, if $L = \{\varepsilon, \text{OOK!}\}$, then $\text{insert}1(L) = \{1, 1\text{OOK!}, 01\text{OK!}, 001\text{K!}, 00\text{K}1!, 00\text{K}!1\}$.
 - (b) Prove that the language $\text{delete}1(L) := \{xy \mid x1y \in L\}$ is regular.
Intuitively, $\text{delete}1(L)$ is the set of all strings that can be obtained from strings in L by deleting exactly one **1**. For example, if $L = \{101101, 00, \varepsilon\}$, then $\text{delete}1(L) = \{01101, 10101, 10110\}$.
4. Consider the following recursively defined function on strings:

$$\text{evens}(w) := \begin{cases} \varepsilon & \text{if } w = \varepsilon \\ \varepsilon & \text{if } w = a \text{ for some symbol } a \\ b \cdot \text{evens}(x) & \text{if } w = abx \text{ for some symbols } a \text{ and } b \text{ and some string } x \end{cases}$$

Intuitively, $\text{evens}(w)$ skips over every other symbol in w . For example:

- $\text{evens}(\text{EXPELLIARMUS}) = \text{XELAMS}$
- $\text{evens}(\text{AVADA} \diamond \text{KEDAVRA}) = \text{VD} \diamond \text{EAR}$.

Once again, let L be an arbitrary regular language.

- (a) Prove that the language $\text{evens}^{-1}(L) := \{w \mid \text{evens}(w) \in L\}$ is regular.
- (b) Prove that the language $\text{evens}(L) := \{\text{evens}(w) \mid w \in L\}$ is regular.

You saw the following context-free grammars in class on Thursday; in each example, the grammar itself is on the left; the explanation for each non-terminal is on the right.

- Properly nested strings of parentheses.

$$S \rightarrow \varepsilon \mid S(S) \quad \text{properly nested parentheses}$$

Here is a different grammar for the same language:

$$S \rightarrow \varepsilon \mid (S) \mid SS \quad \text{properly nested parentheses}$$

- $\{0^m 1^n \mid m \neq n\}$. This is the set of all binary strings composed of some number of 0s followed by a *different* number of 1s.

$S \rightarrow A \mid B$	$\{0^m 1^n \mid m \neq n\}$
$A \rightarrow 0A \mid 0C$	$\{0^m 1^n \mid m > n\}$
$B \rightarrow B1 \mid C1$	$\{0^m 1^n \mid m < n\}$
$C \rightarrow \varepsilon \mid 0C1$	$\{0^m 1^n \mid m = n\}$

Give context-free grammars for each of the following languages. For each grammar, describe the language for each non-terminal, either in English or using mathematical notation, as in the examples above. We probably won't finish all of these during the lab session.

1. $\{0^{2n} 1^n \mid n \geq 0\}$

2. $\{0^m 1^n \mid m \neq 2n\}$

[Hint: If $m \neq 2n$, then either $m < 2n$ or $m > 2n$. Extend the previous grammar, but pay attention to parity. This language contains the string 01.]

3. $\{0, 1\}^* \setminus \{0^{2n} 1^n \mid n \geq 0\}$

[Hint: Extend the previous grammar. What's missing?]

Work on these later:

4. $\{w \in \{0, 1\}^* \mid \#(0, w) = 2 \cdot \#(1, w)\}$ — Binary strings where the number of 0s is exactly twice the number of 1s.

5. $\{0, 1\}^ \setminus \{ww \mid w \in \{0, 1\}^*\}$.

[Anti-hint: The language $\{ww \mid w \in \{0, 1\}^*\}$ is **not** context-free. Thus, the complement of a context-free language is not necessarily context-free!]

Let L be an arbitrary regular language over the alphabet $\Sigma = \{0, 1\}$. Prove that the following languages are also regular. (You probably won't get to all of these.)

1. $\text{FLIPODDS}(L) := \{\text{flipOdds}(w) \mid w \in L\}$, where the function flipOdds inverts every odd-indexed bit in w . For example:

$$\text{flipOdds}(0000111101010101) = 1010010111111111$$

Solution: Let $M = (Q, s, A, \delta)$ be a DFA that accepts L . We construct a new DFA $M' = (Q', s', A', \delta')$ that accepts $\text{FLIPODDS}(L)$ as follows.

Intuitively, M' receives some string $\text{flipOdds}(w)$ as input, restores every other bit to obtain w , and simulates M on the restored string w .

Each state (q, flip) of M' indicates that M is in state q , and we need to flip the next input bit if $\text{flip} = \text{TRUE}$

$$Q' = Q \times \{\text{TRUE}, \text{FALSE}\}$$

$$s' = (s, \text{TRUE})$$

$$A' =$$

$$\delta'((q, \text{flip}), a) =$$

■

2. $\text{UNFLIPODD1S}(L) := \{w \in \Sigma^* \mid \text{flipOdd1s}(w) \in L\}$, where the function flipOdd1s inverts every other **1** bit of its input string, starting with the first **1**. For example:

$$\text{flipOdd1s}(0000111101010101) = 0000010100010001$$

Solution: Let $M = (Q, s, A, \delta)$ be a DFA that accepts L . We construct a new DFA $M' = (Q', s', A', \delta')$ that accepts $\text{UNFLIPODD1S}(L)$ as follows.

Intuitively, M' receives some string w as input, flips every other **1** bit, and simulates M on the transformed string.

Each state (q, flip) of M' indicates that M is in state q , and we need to flip the next **1** bit of and only if $\text{flip} = \text{TRUE}$.

$$Q' = Q \times \{\text{TRUE}, \text{FALSE}\}$$

$$s' = (s, \text{TRUE})$$

$$A' =$$

$$\delta'((q, \text{flip}), a) =$$

■

3. $\text{FLIPODD1s}(L) := \{\text{flipOdd1s}(w) \mid w \in L\}$, where the function *flipOdd1* is defined as in the previous problem.

Solution: Let $M = (Q, s, A, \delta)$ be a DFA that accepts L . We construct a new NFA $M' = (Q', s', A', \delta')$ that accepts $\text{FLIPODD1s}(L)$ as follows.

Intuitively, M' receives some string *flipOdd1s*(w) as input, **guesses** which 0 bits to restore to 1s, and simulates M on the restored string w . No string in $\text{FLIPODD1s}(L)$ has two 1s in a row, so if M' ever sees 11, it rejects.

Each state (q, flip) of M' indicates that M is in state q , and we need to flip a 0 bit before the next 1 if $\text{flip} = \text{TRUE}$.

$$Q' = Q \times \{\text{TRUE}, \text{FALSE}\}$$

$$s' = (s, \text{TRUE})$$

$$A' =$$

$$\delta'((q, \text{flip}), a) =$$

■

4. $\text{FARO}(L) := \{\text{faro}(w, x) \mid w, x \in L \text{ and } |w| = |x|\}$, where the function *faro* is defined recursively as follows:

$$\text{faro}(w, x) := \begin{cases} x & \text{if } w = \varepsilon \\ a \cdot \text{faro}(x, y) & \text{if } w = ay \text{ for some } a \in \Sigma \text{ and some } y \in \Sigma^* \end{cases}$$

For example, $\text{faro}(0001101, 1111001) = 01010111100011$. (A "faro shuffle" splits a deck of cards into two equal piles and then perfectly interleaves them.)

Solution: Let $M = (Q, s, A, \delta)$ be a DFA that accepts L . We construct a DFA $M' = (Q', s', A', \delta')$ that accepts $\text{FARO}(L)$ as follows.

Intuitively, M' reads the string *faro*(w, x) as input, splits the string into the subsequences w and x , and passes each of those strings to an independent copy of M .

Each state (q_1, q_2, next) indicates that the copy of M that gets w is in state q_1 , the copy of M that gets x is in state q_2 , and *next* indicates which copy gets the next input bit.

$$Q' = Q \times Q \times \{1, 2\}$$

$$s' = (s, s, 1)$$

$$A' =$$

$$\delta'((q_1, q_2, \text{next}), a) =$$

■

Here are several problems that are easy to solve in $O(n)$ time, essentially by brute force. Your task is to design algorithms for these problems that are significantly faster.

- Suppose we are given an array $A[1..n]$ of n distinct integers, which could be positive, negative, or zero, sorted in increasing order so that $A[1] < A[2] < \dots < A[n]$.
 - Describe a fast algorithm that either computes an index i such that $A[i] = i$ or correctly reports that no such index exists.
 - Suppose we know in advance that $A[1] > 0$. Describe an even faster algorithm that either computes an index i such that $A[i] = i$ or correctly reports that no such index exists. *[Hint: This is **really** easy.]*
- Suppose we are given an array $A[1..n]$ such that $A[1] \geq A[2]$ and $A[n-1] \leq A[n]$. We say that an element $A[x]$ is a **local minimum** if both $A[x-1] \geq A[x]$ and $A[x] \leq A[x+1]$. For example, there are exactly six local minima in the following array:

9	7	7	2	1	3	7	5	4	7	3	3	4	8	6	9
	▲			▲				▲		▲	▲			▲	

Describe and analyze a fast algorithm that returns the index of one local minimum. For example, given the array above, your algorithm could return the integer 9, because $A[9]$ is a local minimum. *[Hint: With the given boundary conditions, any array **must** contain at least one local minimum. Why?]*

- Suppose you are given two sorted arrays $A[1..n]$ and $B[1..n]$ containing distinct integers. Describe a fast algorithm to find the median (meaning the n th smallest element) of the union $A \cup B$. For example, given the input

$$A[1..8] = [0, 1, 6, 9, 12, 13, 18, 20] \quad B[1..8] = [2, 4, 5, 8, 17, 19, 21, 23]$$

your algorithm should return the integer 9. *[Hint: What can you learn by comparing one element of A with one element of B ?]*

To think about later:

- Now suppose you are given two sorted arrays $A[1..m]$ and $B[1..n]$ and an integer k . Describe a fast algorithm to find the k th smallest element in the union $A \cup B$. For example, given the input

$$A[1..8] = [0, 1, 6, 9, 12, 13, 18, 20] \quad B[1..5] = [2, 5, 7, 17, 19] \quad k = 6$$

your algorithm should return the integer 7.

In lecture, Jeff described an algorithm of Karatsuba that multiplies two n -digit integers using $O(n^{\lg 3})$ single-digit additions, subtractions, and multiplications. In this lab we'll look at some extensions and applications of this algorithm.

1. Describe an algorithm to compute the product of an n -digit number and an m -digit number, where $m < n$, in $O(m^{\lg 3 - 1} n)$ time.

2. Describe an algorithm to compute the decimal representation of 2^n in $O(n^{\lg 3})$ time.

[Hint: Repeated squaring. The standard algorithm that computes one decimal digit at a time requires $\Theta(n^2)$ time.]

3. Describe a divide-and-conquer algorithm to compute the decimal representation of an arbitrary n -bit binary number in $O(n^{\lg 3})$ time.

[Hint: Let $x = a \cdot 2^{n/2} + b$. Watch out for an extra log factor in the running time.]

Think about later:

4. Suppose we can multiply two n -digit numbers in $O(M(n))$ time. Describe an algorithm to compute the decimal representation of an arbitrary n -bit binary number in $O(M(n) \log n)$ time.

A **subsequence** of a sequence (for example, an array, linked list, or string), obtained by removing zero or more elements and keeping the rest in the same sequence order. A subsequence is called a **substring** if its elements are contiguous in the original sequence. For example:

- **SUBSEQUENCE**, **UBSEQU**, and the empty string ε are all substrings (and therefore subsequences) of the string **SUBSEQUENCE**;
- **SBSQNC**, **SQUEE**, and **EEE** are all subsequences of **SUBSEQUENCE** but not substrings;
- **QUEUE**, **EQUUS**, and **DIMAGGIO** are not subsequences (and therefore not substrings) of **SUBSEQUENCE**.

Describe **recursive backtracking** algorithms for the following longest-subsequence problems. Don't worry about running times.

1. Given an array $A[1..n]$ of integers, compute the length of a longest **increasing** subsequence. A sequence $B[1..\ell]$ is *increasing* if $B[i] > B[i-1]$ for every index $i \geq 2$.

For example, given the array

$\langle 3, \underline{1}, \underline{4}, 1, \underline{5}, 9, 2, \underline{6}, 5, 3, 5, \underline{8}, \underline{9}, 7, 9, 3, 2, 3, 8, 4, 6, 2, 7 \rangle$

your algorithm should return the integer 6, because $\langle 1, 4, 5, 6, 8, 9 \rangle$ is a longest increasing subsequence (one of many).

2. Given an array $A[1..n]$ of integers, compute the length of a longest **decreasing** subsequence. A sequence $B[1..\ell]$ is *decreasing* if $B[i] < B[i-1]$ for every index $i \geq 2$.

For example, given the array

$\langle 3, 1, 4, 1, 5, \underline{9}, 2, \underline{6}, 5, 3, \underline{5}, 8, 9, 7, 9, 3, 2, 3, 8, \underline{4}, 6, \underline{2}, 7 \rangle$

your algorithm should return the integer 5, because $\langle 9, 6, 5, 4, 2 \rangle$ is a longest decreasing subsequence (one of many).

3. Given an array $A[1..n]$ of integers, compute the length of a longest **alternating** subsequence. A sequence $B[1..\ell]$ is *alternating* if $B[i] < B[i-1]$ for every even index $i \geq 2$, and $B[i] > B[i-1]$ for every odd index $i \geq 3$.

For example, given the array

$\langle \underline{3}, \underline{1}, \underline{4}, \underline{1}, \underline{5}, 9, \underline{2}, \underline{6}, \underline{5}, 3, 5, \underline{8}, 9, \underline{7}, \underline{9}, \underline{3}, 2, 3, \underline{8}, \underline{4}, \underline{6}, \underline{2}, \underline{7} \rangle$

your algorithm should return the integer 17, because $\langle 3, 1, 4, 1, 5, 2, 6, 5, 8, 7, 9, 3, 8, 4, 6, 2, 7 \rangle$ is a longest alternating subsequence (one of many).

To think about later:

4. Given an array $A[1..n]$ of integers, compute the length of a longest **convex** subsequence of A . A sequence $B[1..l]$ is *convex* if $B[i] - B[i-1] > B[i-1] - B[i-2]$ for every index $i \geq 3$.

For example, given the array

$\langle \underline{3}, \underline{1}, 4, \underline{1}, 5, 9, \underline{2}, 6, 5, 3, \underline{5}, 8, \underline{9}, 7, 9, 3, 2, 3, 8, 4, 6, 2, 7 \rangle$

your algorithm should return the integer 6, because $\langle 3, 1, 1, 2, 5, 9 \rangle$ is a longest convex subsequence (one of many).

5. Given an array $A[1..n]$, compute the length of a longest **palindrome** subsequence of A . Recall that a sequence $B[1..l]$ is a *palindrome* if $B[i] = B[l - i + 1]$ for every index i .

For example, given the array

$\langle 3, 1, \underline{4}, 1, 5, \underline{9}, 2, 6, \underline{5}, \underline{3}, \underline{5}, 8, 9, 7, \underline{9}, 3, 2, 3, 8, \underline{4}, 6, 2, 7 \rangle$

your algorithm should return the integer 7, because $\langle 4, 9, 5, 3, 5, 9, 4 \rangle$ is a longest palindrome subsequence (one of many).

A **subsequence** of a sequence (for example, an array, a linked list, or a string), obtained by removing zero or more elements and keeping the rest in the same sequence order. A subsequence is called a **substring** if its elements are contiguous in the original sequence. For example:

- **SUBSEQUENCE**, **UBSEQU**, and the empty string ϵ are all substrings of the string **SUBSEQUENCE**;
- **SBSQNC**, **UEQUE**, and **EEE** are all subsequences of **SUBSEQUENCE** but not substrings;
- **QUEUE**, **SSS**, and **FOOBAR** are not subsequences of **SUBSEQUENCE**.

Describe and analyze **dynamic programming** algorithms for the following longest-subsequence problems. Use the recursive backtracking algorithms you developed on Wednesday.

1. Given an array $A[1..n]$ of integers, compute the length of a longest **increasing** subsequence of A . A sequence $B[1..\ell]$ is **increasing** if $B[i] > B[i-1]$ for every index $i \geq 2$.
2. Given an array $A[1..n]$ of integers, compute the length of a longest **decreasing** subsequence of A . A sequence $B[1..\ell]$ is **decreasing** if $B[i] < B[i-1]$ for every index $i \geq 2$.
3. Given an array $A[1..n]$ of integers, compute the length of a longest **alternating** subsequence of A . A sequence $B[1..\ell]$ is **alternating** if $B[i] < B[i-1]$ for every even index $i \geq 2$, and $B[i] > B[i-1]$ for every odd index $i \geq 3$.
4. Given an array $A[1..n]$ of integers, compute the length of a longest **convex** subsequence of A . A sequence $B[1..\ell]$ is **convex** if $B[i] - B[i-1] > B[i-1] - B[i-2]$ for every index $i \geq 3$.
5. Given an array $A[1..n]$, compute the length of a longest **palindrome** subsequence of A . Recall that a sequence $B[1..\ell]$ is a **palindrome** if $B[i] = B[\ell - i + 1]$ for every index i .

Basic steps in developing a dynamic programming algorithm

1. **Formulate the problem recursively.** This is the hard part. There are two distinct but equally important things to include in your formulation.
 - (a) **Specification.** First, give a clear and precise English description of the problem you are claiming to solve. Not *how* to solve the problem, but *what* the problem actually is. Omitting this step in homeworks or exams is an automatic zero.
 - (b) **Solution.** Second, give a clear recursive formula or algorithm for the whole problem in terms of the answers to smaller instances of *exactly* the same problem. It generally helps to think in terms of a recursive definition of your inputs and outputs. If you discover that you need a solution to a *similar* problem, or a slightly *related* problem, you're attacking the wrong problem; go back to step 1.
2. **Build solutions to your recurrence from the bottom up.** Write an algorithm that starts with the base cases of your recurrence and works its way up to the final solution, by considering intermediate subproblems in the correct order. This stage can be broken down into several smaller, relatively mechanical steps:
 - (a) **Identify the subproblems.** What are all the different ways can your recursive algorithm call itself, starting with some initial input?
 - (b) **Analyze running time.** Add up the running times of all possible subproblems, *ignoring the recursive calls*.
 - (c) **Choose a memoization data structure.** For most problems, each recursive subproblem can be identified by a few integers, so you can use a multidimensional array. But some problems need a more complicated data structure.
 - (d) **Identify dependencies.** Except for the base cases, every recursive subproblem depends on other subproblems—which ones? Draw a picture of your data structure, pick a generic element, and draw arrows from each of the other elements it depends on. Then formalize your picture.
 - (e) **Find a good evaluation order.** Order the subproblems so that each subproblem comes *after* the subproblems it depends on. Typically, you should consider the base cases first, then the subproblems that depends only on base cases, and so on. ***Be careful!***
 - (f) **Write down the algorithm.** You know what order to consider the subproblems, and you know how to solve each subproblem. So do that! If your data structure is an array, this usually means writing a few nested for-loops around your original recurrence.

Nancy Gunter, the founding dean of the new Maksymilian R. Levchin College of Computing, has commissioned a series of snow ramps on the south slope of the Orchard Downs sledding hill¹ and challenged Erhan Hajek, head of the Department of Electrical and Computer Engineering, to a sledding contest. Erhan and Nancy will both sled down the hill, each trying to maximize their air time. The winner gets to expand their department/college into Siebel Center, the ECE Building, *and* the new Campus Instructional Facility; the loser has to move their entire department/college under the Boneyard bridge behind Everitt Lab.

Whenever Nancy or Erhan reaches a ramp *while on the ground*, they can either use that ramp to jump through the air, possibly flying over one or more ramps, or sled past that ramp and stay on the ground. Obviously, if someone flies over a ramp, they cannot use that ramp to extend their jump.

1. Suppose you are given a pair of arrays $Ramp[1..n]$ and $Length[1..n]$, where $Ramp[i]$ is the distance from the top of the hill to the i th ramp, and $Length[i]$ is the distance that any sledder who takes the i th ramp will travel through the air.

Describe and analyze an algorithm to determine the maximum *total* distance that Erhan and Nancy can travel through the air.

2. Uh-oh. The university lawyers heard about Nancy and Erhan's little bet and immediately objected. To protect the university from both lawsuits and sky-rocketing insurance rates, they impose an upper bound on the number of jumps that either sledder can take.

Describe and analyze an algorithm to determine the maximum total distance that Nancy or Erhan can spend in the air *with at most k jumps*, given the original arrays $Ramp[1..n]$ and $Length[1..n]$ and the integer k as input.

3. **To think about later:** When the lawyers realized that imposing their restriction didn't immediately shut down the contest, they added yet another restriction: No ramp may be used more than once! Disgusted by all the legal interference, Erhan and Nancy give up on their bet and decide to cooperate to put on a good show for the spectators.

Describe and analyze an algorithm to determine the maximum total distance that Nancy and Erhan can spend in the air, each taking at most k jumps (so at most $2k$ jumps total), and with each ramp used at most once.

¹The north slope is faster, but too short for an interesting contest.

1. A *basic arithmetic expression* is composed of characters from the set $\{1, +, \times\}$ and parentheses. Almost every integer can be represented by more than one basic arithmetic expression. For example, all of the following basic arithmetic expressions represent the integer 14:

$$\begin{aligned}
 &1 + 1 + 1 + 1 + 1 + 1 + 1 + 1 + 1 + 1 + 1 + 1 + 1 + 1 + 1 \\
 &((1 + 1) \times (1 + 1 + 1 + 1 + 1)) + ((1 + 1) \times (1 + 1)) \\
 &(1 + 1) \times (1 + 1 + 1 + 1 + 1 + 1 + 1) \\
 &(1 + 1) \times (((1 + 1 + 1) \times (1 + 1)) + 1)
 \end{aligned}$$

Describe and analyze an algorithm to compute, given an integer n as input, the minimum number of 1's in a basic arithmetic expression whose value is equal to n . The number of parentheses doesn't matter, just the number of 1's. For example, when $n = 14$, your algorithm should return 8, for the final expression above. The running time of your algorithm should be bounded by a small polynomial function of n .

Think about later:

2. Suppose you are given a sequence of integers separated by $+$ and $-$ signs; for example:

$$1 + 3 - 2 - 5 + 1 - 6 + 7$$

You can change the value of this expression by adding parentheses in different places. For example:

$$\begin{aligned}
 &1 + 3 - 2 - 5 + 1 - 6 + 7 = -1 \\
 &(1 + 3 - (2 - 5)) + (1 - 6) + 7 = 9 \\
 &(1 + (3 - 2)) - (5 + 1) - (6 + 7) = -17
 \end{aligned}$$

Describe and analyze an algorithm to compute, given a list of integers separated by $+$ and $-$ signs, the maximum possible value the expression can take by adding parentheses. Parentheses must be used only to group additions and subtractions; in particular, do not use them to create implicit multiplication as in $1 + 3(-2)(-5) + 1 - 6 + 7 = 33$.

For each of the problems below, transform the input into a graph and apply a standard graph algorithm that you've seen in class. Whenever you use a standard graph algorithm, you *must* provide the following information. (I recommend actually using a bulleted list.)

- What are the vertices? What does each vertex represent?
- What are the edges? Are they directed or undirected?
- If the vertices and/or edges have associated values, what are they?
- What problem do you need to solve on this graph?
- What standard algorithm are you using to solve that problem?
- What is the running time of your entire algorithm, *including* the time to build the graph, as a function of the original input parameters?

1. **Snakes and Ladders** is a classic board game, originating in India no later than the 16th century. The board consists of an $n \times n$ grid of squares, numbered consecutively from 1 to n^2 , starting in the bottom left corner and proceeding row by row from bottom to top, with rows alternating to the left and right. Certain pairs of squares, always in different rows, are connected by either “snakes” (leading down) or “ladders” (leading up). *Each square can be an endpoint of at most one snake or ladder.*

100	99	98	97	96	95	94	93	92	91
81	82	83	84	85	86	87	88	89	90
80	79	78	77	76	75	74	73	72	71
61	62	63	64	65	66	67	68	69	70
60	59	58	57	56	55	54	53	52	51
41	42	43	44	45	46	47	48	49	50
40	39	38	37	36	35	34	33	32	31
21	22	23	24	25	26	27	28	29	30
20	19	18	17	16	15	14	13	12	11
1	2	3	4	5	6	7	8	9	10

A typical Snakes and Ladders board.

Upward straight arrows are ladders; downward wavy arrows are snakes.

You start with a token in cell 1, in the bottom left corner. In each move, you advance your token up to k positions, for some fixed constant k (typically 6). Then if the token is at the *top* of a snake, you *must* slide the token down to the bottom of that snake, and if the token is at the *bottom* of a ladder, you *may* move the token up to the top of that ladder.

Describe and analyze an efficient algorithm to compute the smallest number of moves required for the token to reach the last square of the Snakes and Ladders board.

2. Let G be an undirected graph. Suppose we start with two coins on two arbitrarily chosen vertices of G . At every step, each coin *must* move to an adjacent vertex. Describe and analyze an efficient algorithm to compute the minimum number of steps to reach a configuration where both coins are on the same vertex, or to report correctly that no such configuration is reachable. The input to your algorithm consists of a graph $G = (V, E)$ and two vertices $u, v \in V$ (which may or may not be distinct).

Think about later:

3. Let G be an undirected graph. Suppose we start with 374 coins on 374 arbitrarily chosen vertices of G . At every step, each coin *must* move to an adjacent vertex. Describe and analyze an efficient algorithm to compute the minimum number of steps to reach a configuration where all 374 coins are on the same vertex, or to report correctly that no such configuration is reachable. The input to your algorithm consists of a graph $G = (V, E)$ and starting vertices s_1, s_2, \dots, s_{374} (which may or may not be distinct).

For each of the problems below, transform the input into a graph and apply a standard graph algorithm that you've seen in class. Whenever you use a standard graph algorithm, you *must* provide the following information. (I recommend actually using a bulleted list.)

- What are the vertices? What does each vertex represent?
- What are the edges? Are they directed or undirected?
- If the vertices and/or edges have associated values, what are they?
- What problem do you need to solve on this graph?
- What standard algorithm are you using to solve that problem?
- What is the running time of your entire algorithm, *including* the time to build the graph, as a function of the original input parameters?

1. Inspired by the previous lab, you decide to organize a Snakes and Ladders competition with n participants. In this competition, each game of Snakes and Ladders involves three players. After the game is finished, they are ranked first, second, and third. Each player may be involved in any (non-negative) number of games, and the number need not be equal among players.

At the end of the competition, m games have been played. You realize that you forgot to implement a proper rating system, and therefore decide to produce the overall ranking of all n players as you see fit. However, to avoid being too suspicious, if player A ranked better than player B in any game, then A must rank better than B in the overall ranking.

You are given the list of players and their ranking in each of the m games. Describe and analyze an algorithm that produces an overall ranking of the n players that is consistent with the individual game rankings, or correctly reports that no such ranking exists.

2. There are n galaxies connected by m intergalactic teleport-ways. Each teleport-way joins two galaxies and can be traversed in both directions. However, the company that runs the teleport-ways has established an extremely lucrative cost structure: Anyone can teleport *further* from their home galaxy at no cost whatsoever, but teleporting *toward* their home galaxy is prohibitively expensive.

Judy has decided to take a sabbatical tour of the universe by visiting as many galaxies as possible, starting at her home galaxy. To save on travel expenses, she wants to teleport away from her home galaxy at every step, except for the very last teleport home.

Describe and analyze an algorithm to compute the maximum number of galaxies that Judy can visit. Your input consists of an undirected graph G with n vertices and m edges describing the teleport-way network, an integer $1 \leq s \leq n$ identifying Judy's home galaxy, and an array $D[1..n]$ containing the distances of each galaxy from s .

To think about later:

3. Just before embarking on her universal tour, Judy wins the space lottery, giving her just enough money to afford *two* teleports toward her home galaxy. Describe and analyze a new algorithm to compute the maximum number of galaxies Judy can visit; if she visits the same galaxy twice, that counts as two visits. After all, argues the travel agent, who can see an entire galaxy in just one visit?

- *4. Judy replies angrily to the travel agent that *she* can see an entire galaxy in just one visit, because 99% of every galaxy is exactly the same glowing balls of plasma and lifeless chunks of rock and McDonalds and Starbucks and prefab “Irish” pubs and overpriced souvenir shops and Peruvian street-corner musicians as every other galaxy.

Describe and analyze an algorithm to compute the maximum number of *distinct* galaxies Judy can visit. She is still *allowed* to visit the same galaxy more than once, but only the first visit counts toward her total.

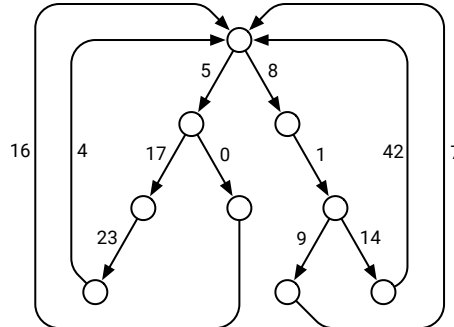
1. Describe and analyze an algorithm to compute the shortest path from vertex s to vertex t in a directed graph with weighted edges, where exactly *one* edge $u \rightarrow v$ has negative weight. Assume the graph has no negative cycles. [Hint: Modify the input graph and run Dijkstra's algorithm. Alternatively, **don't** modify the input graph, but run Dijkstra's algorithm anyway.]
2. You just discovered your best friend from elementary school on Twitbook. You both want to meet as soon as possible, but you live in two different cities that are far apart. To minimize travel time, you agree to meet at an intermediate city, and then you simultaneously hop in your cars and start driving toward each other. But where *exactly* should you meet?

You are given a weighted graph $G = (V, E)$, where the vertices V represent cities and the edges E represent roads that directly connect cities. Each edge e has a weight $w(e)$ equal to the time required to travel between the two cities. You are also given a vertex p , representing your starting location, and a vertex q , representing your friend's starting location.

Describe and analyze an algorithm to find the target vertex t that allows you and your friend to meet as soon as possible, assuming both of you leave home *right now*.

To think about later:

3. A *looped tree* is a weighted, directed graph built from a binary tree by adding an edge from every leaf back to the root. Every edge has a non-negative weight.



A looped tree.

- (a) How much time would Dijkstra's algorithm require to compute the shortest path between two vertices u and v in a looped tree with n nodes?
- (b) Describe and analyze a faster algorithm.

1. Suppose that you have just finished computing the array $\text{dist}[1..V, 1..V]$ of shortest-path distances between **all** pairs of vertices in an edge-weighted directed graph G . Unfortunately, you discover that you incorrectly entered the weight of a single edge $u \rightarrow v$, so all that precious CPU time was wasted. Or was it? Maybe your distances are correct after all!

In each of the following problems, let $w(u \rightarrow v)$ denote the weight that you used in your distance computation, and let $w'(u \rightarrow v)$ denote the correct weight of $u \rightarrow v$.

- (a) Suppose $w(u \rightarrow v) > w'(u \rightarrow v)$; that is, the weight you used for $u \rightarrow v$ was *larger* than its true weight. Describe an algorithm that repairs the distance array in **$O(V^2)$ time** under this assumption. [Hint: For every pair of vertices x and y , either $u \rightarrow v$ is on the shortest path from x to y or it isn't.]
 - (b) Maybe even that was too much work. Describe an algorithm that determines whether your original distance array is actually correct in **$O(1)$ time**, again assuming that $w(u \rightarrow v) > w'(u \rightarrow v)$. [Hint: Either $u \rightarrow v$ is the shortest path from u to v or it isn't.]
 - (c) **To think about later:** Describe an algorithm that determines in **$O(VE)$ time** whether your distance array is actually correct, even if $w(u \rightarrow v) < w'(u \rightarrow v)$.
 - (d) **To think about later:** Argue that when $w(u \rightarrow v) < w'(u \rightarrow v)$, repairing the distance array *requires* recomputing shortest paths from scratch, at least in the worst case.
2. You—yes, *you*—can cause a major economic collapse with the power of graph algorithms!¹ The *arbitrage* business is a money-making scheme that takes advantage of differences in currency exchange. In particular, suppose that 1 US dollar buys 120 Japanese yen; 1 yen buys 0.01 euros; and 1 euro buys 1.2 US dollars. Then, a trader starting with \$1 can convert their money from dollars to yen, then from yen to euros, and finally from euros back to dollars, ending with \$1.44! The cycle of currencies $\$ \rightarrow \text{¥} \rightarrow \text{€} \rightarrow \$$ is called an **arbitrage cycle**. Of course, finding and exploiting arbitrage cycles before the prices are corrected requires extremely fast algorithms.

Suppose n different currencies are traded in your currency market. You are given the matrix $R[1..n]$ of exchange rates between every pair of currencies; for each i and j , one unit of currency i can be traded for $R[i, j]$ units of currency j . (Do *not* assume that $R[i, j] \cdot R[j, i] = 1$.)

- (a) Describe an algorithm that returns an array $V[1..n]$, where $V[i]$ is the maximum amount of currency i that you can obtain by trading, starting with one unit of currency 1, assuming there are no arbitrage cycles.
- (b) Describe an algorithm to determine whether the given matrix of currency exchange rates creates an arbitrage cycle.
- * (c) To think about later:** Modify your algorithm from part (b) to actually return an arbitrage cycle, if such a cycle exists.

¹No, you can't.

1. **Flappy Bird** is a once-popular mobile game written by Nguyễn Hà Đông, originally released in May 2013.¹ The game features a bird named “Faby”, who flies to the right at constant speed. Whenever the player taps the screen, Faby is given a fixed upward velocity; between taps, Faby falls due to gravity. Faby flies through a landscape of pipes until it touches either a pipe or the ground, at which point the game is over. Your task, should you choose to accept it, is to develop an algorithm to play Flappy Bird automatically.

Well, okay, not Flappy Bird exactly, but the following drastically simplified variant, which I will call **Flappy Pixel**. Instead of a bird, Faby is a single point, specified by three integers: horizontal position x (in pixels), vertical position y (in pixels), and vertical speed y' (in pixels per frame). Faby’s environment is described by two arrays $Hi[1..n]$ and $Lo[1..n]$, where for each index i , we have $0 < Lo[i] < Hi[i] < h$ for some fixed height value h . The game is described by the following piece of pseudocode:

```

FLAPPYPIXEL( $Hi[1..n], Lo[1..n]$ ):
   $y \leftarrow \lceil h/2 \rceil$ 
   $y' \leftarrow 0$ 
  for  $x \leftarrow 1$  to  $n$ 
    if the player taps the screen
       $y' \leftarrow 10$             $\langle\langle flap \rangle\rangle$ 
    else
       $y' \leftarrow y' - 1$        $\langle\langle fall \rangle\rangle$ 
     $y \leftarrow y + y'$ 
    if  $y < Lo[x]$  or  $y > Hi[x]$ 
      return FALSE            $\langle\langle player loses \rangle\rangle$ 
  return TRUE                  $\langle\langle player wins \rangle\rangle$ 

```

Notice that in each iteration of the main loop, the player has the option of tapping the screen.

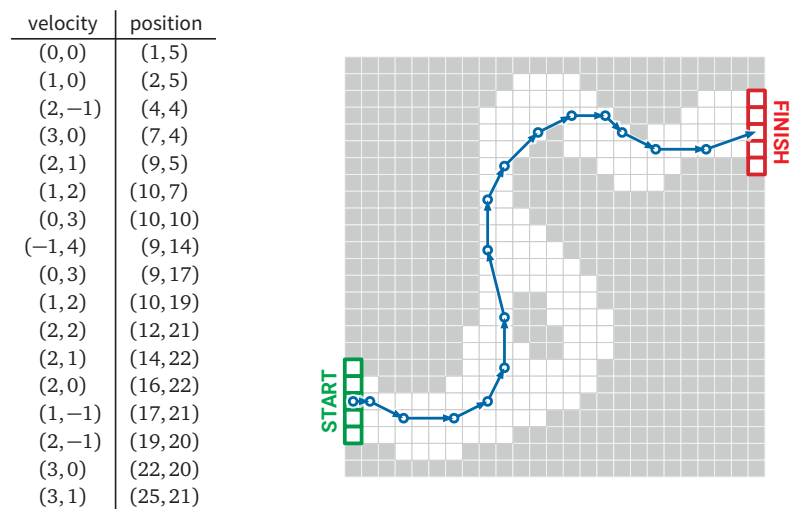
Describe and analyze an algorithm to determine the minimum number of times that the player must tap the screen to win Flappy Pixel, given the integer h and the arrays $Hi[1..n]$ and $Lo[1..n]$ as input. If the game cannot be won at all, your algorithm should return ∞ . Describe the running time of your algorithm as a function of n and h .

[Problem 2 is on the back.]

¹In 2015, Đông pulled all official versions of Flappy Bird from all online app stores, expressing guilt for the addictive behavior his game had encouraged. Unfortunately, dozens of unofficial clones had already been launched by then, so Đông’s altruism was rendered moot. Although Flappy Bird has significantly waned in popularity as a mobile, you can still find officially licensed arcade versions that give you tickets which you can exchange for prizes that cost significantly less than the money you spent to win the tickets.

2. **Racetrack** (also known as *Graph Racers* and *Vector Rally*) is a two-player paper-and-pencil racing game that Jeff played on the bus in 5th grade.² The game is played with a track drawn on a sheet of graph paper. The players alternately choose a sequence of grid points that represent the motion of a car around the track, subject to certain constraints explained below.

Each car has a *position* and a *velocity*, both with integer x - and y -coordinates. A subset of grid squares is marked as the *starting area*, and another subset is marked as the *finishing area*. The initial position of each car is chosen by the player somewhere in the starting area; the initial velocity of each car is always $(0, 0)$. At each step, the player optionally changes each component of the velocity by at most 1. The car's new position is then determined by adding the new velocity to the car's previous position. The new position must be inside the track; otherwise, the car crashes and that player loses the race.³ The race ends when the first car reaches a position inside the finishing area.



A 16-step Racetrack run, on a 25×25 track. This is *not* the shortest run on this track.

Suppose the racetrack is represented by an $n \times n$ array of bits, where each 0 bit represents a grid point inside the track, each 1 bit represents a grid point outside the track, the “starting line” consists of all 0 bits in column 1, and the “finishing line” consists of all 0 bits in column n .

Describe and analyze an algorithm to find the minimum number of steps required to move a car from the starting line to the finish line of a given racetrack.

[Hint: Your initial analysis can be improved.]

²The actual game is a bit more complicated than the version described here. See <http://harmmade.com/vectorracer/> for an excellent online version.

³However, it is not necessary for the entire line segment between the old position and the new position to lie inside the track. Sometimes Speed Racer has to push the A button.

To think about later:

3. Consider the following variant of Flappy Pixel. The mechanics of the game are unchanged, but now the environment is specified by an array $Points[1..n, 1..h]$ of integers, which could be positive, negative, or zero. If Faby falls off the top or bottom edge of the environment, the game immediately ends and the player gets nothing. Otherwise, at each frame, the player earns $Points[x, y]$ points, where (x, y) is Faby's current position. The game ends when Faby reaches the right end of the environment.

```

FLAPPYPIXEL2( $Points[1..n]$ ):
   $score \leftarrow 0$ 
   $y \leftarrow \lceil h/2 \rceil$ 
   $y' \leftarrow 0$ 
  for  $x \leftarrow 1$  to  $n$ 
    if the player taps the screen
       $y' \leftarrow 10$             $\langle\langle flap \rangle\rangle$ 
    else
       $y' \leftarrow y' - 1$        $\langle\langle fall \rangle\rangle$ 
     $y \leftarrow y + y'$ 
    if  $y < 1$  or  $y > h$ 
      return  $-\infty$             $\langle\langle fail \rangle\rangle$ 
     $score \leftarrow score + Points[x, y]$ 
  return  $score$ 

```

Describe and analyze an algorithm to determine the maximum possible score that a player can earn in this game.

4. We can also consider a similar variant of Racetrack. Instead of bits, the “track” is described by an array $Points[1..n, 1..n]$ of *numbers*, which could be positive, negative, or zero. Whenever the car lands on a grid cell (i, j) , the player receives $Points[i, j]$ points. Forbidden grid cells are indicated by $Points[i, j] = -\infty$.

Describe and analyze an algorithm to find the largest possible score that a player can earn by moving a car from column 1 (the starting line) to column n (the finish line).

[Hint: Wait, what if all the point values are positive?]

1. Suppose you are given a magic black box that somehow answers the following decision problem in *polynomial time*:

- INPUT: A boolean circuit K with n inputs and one output.
- OUTPUT: TRUE if there are input values $x_1, x_2, \dots, x_n \in \{\text{TRUE}, \text{FALSE}\}$ that make K output TRUE, and FALSE otherwise.

Using this black box as a subroutine, describe an algorithm that solves the following related search problem in *polynomial time*:

- INPUT: A boolean circuit K with n inputs and one output.
- OUTPUT: Input values $x_1, x_2, \dots, x_n \in \{\text{TRUE}, \text{FALSE}\}$ that make K output TRUE, or NONE if there are no such inputs.

[Hint: You can use the magic box more than once.]

2. An **independent set** in a graph G is a subset S of the vertices of G , such that no two vertices in S are connected by an edge in G . Suppose you are given a magic black box that somehow answers the following decision problem in *polynomial time*:

- INPUT: An undirected graph G and an integer k .
- OUTPUT: TRUE if G has an independent set of size k , and FALSE otherwise.

- (a) Using this black box as a subroutine, describe algorithms that solves the following optimization problem in *polynomial time*:

- INPUT: An undirected graph G .
- OUTPUT: The size of the largest independent set in G .

[Hint: You've seen this problem before.]

- (b) Using this black box as a subroutine, describe algorithms that solves the following search problem in *polynomial time*:

- INPUT: An undirected graph G .
- OUTPUT: An independent set in G of maximum size.

To think about later:

3. Formally, a **proper coloring** of a graph $G = (V, E)$ is a function $c: V \rightarrow \{1, 2, \dots, k\}$, for some integer k , such that $c(u) \neq c(v)$ for all $uv \in E$. Less formally, a valid coloring assigns each vertex of G a color, such that every edge in G has endpoints with different colors. The **chromatic number** of a graph is the minimum number of colors in a proper coloring of G .

Suppose you are given a magic black box that somehow answers the following decision problem *in polynomial time*:

- INPUT: An undirected graph G and an integer k .
- OUTPUT: TRUE if G has a proper coloring with k colors, and FALSE otherwise.

Using this black box as a subroutine, describe an algorithm that solves the following **coloring problem** *in polynomial time*:

- INPUT: An undirected graph G .
- OUTPUT: A valid coloring of G using the minimum possible number of colors.

[Hint: You can use the magic box more than once. The input to the magic box is a graph and **only** a graph, meaning **only** vertices and edges.]

Proving that a problem X is NP-hard requires several steps:

- Choose a problem Y that you already know is NP-hard (because we told you so in class).
- Describe an algorithm to solve Y , using an algorithm for X as a subroutine. Typically this algorithm has the following form: Given an instance of Y , transform it into an instance of X , and then call the magic black-box algorithm for X .
- **Prove** that your algorithm is correct. This always requires two separate steps, which are usually of the following form:
 - **Prove** that your algorithm transforms “good” instances of Y into “good” instances of X .
 - **Prove** that your algorithm transforms “bad” instances of Y into “bad” instances of X . Equivalently: Prove that if your transformation produces a “good” instance of X , then it was given a “good” instance of Y .
- Argue that your algorithm for Y runs in polynomial time. (This is usually trivial.)

1. Recall the following $k\text{COLOR}$ problem: Given an undirected graph G , can its vertices be colored with k colors, so that every edge touches vertices with two different colors?

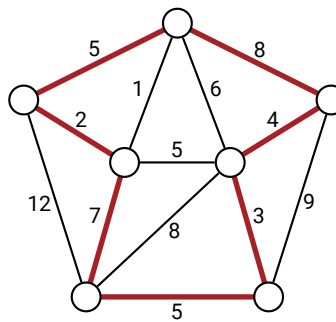
- (a) Describe a direct polynomial-time reduction from 3COLOR to 4COLOR .
- (b) Prove that $k\text{COLOR}$ problem is NP-hard for any $k \geq 3$.

2. A *Hamiltonian cycle* in a graph G is a cycle that goes through every vertex of G exactly once. Deciding whether an arbitrary graph contains a Hamiltonian cycle is NP-hard.

A *tonian cycle* in a graph G is a cycle that goes through at least *half* of the vertices of G . Prove that deciding whether a graph contains a tonian cycle is NP-hard.

To think about later:

3. Let G be an undirected graph with weighted edges. A Hamiltonian cycle in G is *heavy* if the total weight of edges in the cycle is at least half of the total weight of all edges in G . Prove that deciding whether a graph contains a heavy Hamiltonian cycle is NP-hard.

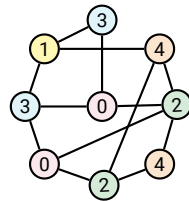


A heavy Hamiltonian cycle. The cycle has total weight 34; the graph has total weight 67.

Prove that each of the following problems is NP-hard.

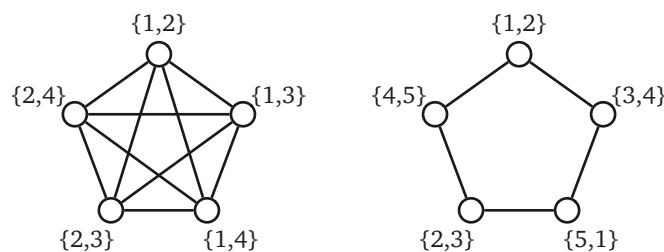
1. Given an undirected graph G , does G contain a simple path that visits all but 374 vertices?
2. Given an undirected graph G , does G have a spanning tree in which every node has degree at most 374?
3. Given an undirected graph G , does G have a spanning tree with at most 374 leaves?

- Recall that a 5-coloring of a graph G is a function that assigns each vertex of G a “color” from the set $\{0, 1, 2, 3, 4\}$, such that for any edge uv , vertices u and v are assigned different “colors”. A 5-coloring is **careful** if the colors assigned to adjacent vertices are not only distinct, but differ by more than 1 (mod 5). Prove that deciding whether a given graph has a careful 5-coloring is NP-hard. [Hint: Reduce from the standard 5COLOR problem.]



A careful 5-coloring.

- Prove that the following problem is NP-hard: Given an undirected graph G , find *any* integer $k > 374$ such that G has a proper coloring with k colors but G does not have a proper coloring with $k - 374$ colors.
- A **bicoloring** of an undirected graph assigns each vertex a set of *two* colors. There are two types of bicoloring: In a *weak* bicoloring, the endpoints of each edge must use *different* sets of colors; however, these two sets may share one color. In a *strong* bicoloring, the endpoints of each edge must use *distinct* sets of colors; that is, they must use four colors altogether. Every strong bicoloring is also a weak bicoloring.
 - Prove that finding the minimum number of colors in a weak bicoloring of a given graph is NP-hard.
 - Prove that finding the minimum number of colors in a strong bicoloring of a given graph is NP-hard.



Left: A weak bicoloring of a 5-clique with four colors.
 Right: A strong bicoloring of a 5-cycle with five colors.

Proving that a language L is undecidable by reduction requires several steps. (These are the essentially the same steps you already use to prove that a problem is NP-hard.)

- Choose a language L' that you already know is undecidable (because we told you so in class). The simplest choice is usually the standard halting language

$$\text{HALT} := \{ \langle M, w \rangle \mid M \text{ halts on } w \}$$

- Describe an algorithm that decides L' , using an algorithm that decides L as a black box. Typically your reduction will have the following form:

Given an arbitrary string x , construct a special string y ,
such that $y \in L$ if and only if $x \in L'$.

In particular, if $L = \text{HALT}$, your reduction will have the following form:

Given the encoding $\langle M, w \rangle$ of a Turing machine M and a string w ,
construct a special string y , such that
 $y \in L$ if and only if M halts on input w .

- Prove that your algorithm is correct. This proof almost always requires two separate steps:
 - Prove that if $x \in L'$ then $y \in L$.
 - Prove that if $x \notin L'$ then $y \notin L$.

Very important: Name every object in your proof, and *always* refer to objects by their names. Never *ever* refer to “the Turing machine” or “the algorithm” or “the code” or “the input string” or (gods forbid) “it” or “this”, even in casual conversation, even if you’re “just” explaining your intuition, even when you’re “just” *thinking* about the reduction to yourself.

Prove that the following languages are undecidable.

1. $\text{ACCEPTILLINI} := \{ \langle M \rangle \mid M \text{ accepts the string } \text{ILLINI} \}$
2. $\text{ACCEPTTHREE} := \{ \langle M \rangle \mid M \text{ accepts exactly three strings} \}$
3. $\text{ACCEPTPALINDROME} := \{ \langle M \rangle \mid M \text{ accepts at least one palindrome} \}$
4. $\text{ACCEPTONLYPALINDROMES} := \{ \langle M \rangle \mid \text{Every string accepted by } M \text{ is a palindrome} \}$

A solution for problem 1 appears on the next page; don’t look at it until you’ve thought a bit about the problem first.

Solution (for problem 1): For the sake of argument, suppose there is an algorithm `DECIDEACCEPTILLINI` that correctly decides the language `ACCEPTILLINI`. Then we can solve the halting problem as follows:

```

DECIDEHALT( $\langle M, w \rangle$ ):
  Encode the following Turing machine  $M'$ :
     $M'(x)$ :
      run  $M$  on input  $w$ 
      return TRUE
  if DECIDEACCEPTILLINI( $\langle M' \rangle$ )
    return TRUE
  else
    return FALSE

```

We prove this reduction correct as follows:

\Rightarrow Suppose M halts on input w .

Then M' accepts *every* input string x .

In particular, M' accepts the string `ILLINI`.

So `DECIDEACCEPTILLINI` accepts the encoding $\langle M' \rangle$.

So `DECIDEHALT` correctly accepts the encoding $\langle M, w \rangle$.

\Leftarrow Suppose M does not halt on input w .

Then M' diverges on *every* input string x .

In particular, M' does not accept the string `ILLINI`.

So `DECIDEACCEPTILLINI` rejects the encoding $\langle M' \rangle$.

So `DECIDEHALT` correctly rejects the encoding $\langle M, w \rangle$.

In both cases, `DECIDEHALT` is correct. But that's impossible, because `HALT` is undecidable. We conclude that the algorithm `DECIDEACCEPTILLINI` does not exist. ■

As usual for undecidability proofs, this proof invokes *four* distinct Turing machines:

- The hypothetical algorithm `DECIDEACCEPTILLINI`.
- The new algorithm `DECIDEHALT` that we construct in the solution.
- The arbitrary machine M whose encoding is part of the input to `DECIDEHALT`.
- The special machine M' whose encoding `DECIDEHALT` constructs (from the encoding of M and w) and then passes to `DECIDEACCEPTILLINI`.

Rice's Theorem. Let \mathcal{L} be any set of languages that satisfies the following conditions:

- There is a Turing machine Y such that $\text{ACCEPT}(Y) \in \mathcal{L}$.
- There is a Turing machine N such that $\text{ACCEPT}(N) \notin \mathcal{L}$.

The language $\text{ACCEPTIN}(\mathcal{L}) := \{ \langle M \rangle \mid \text{ACCEPT}(M) \in \mathcal{L} \}$ is undecidable.

Prove that the following languages are undecidable using Rice's Theorem:

1. $\text{ACCEPTREGULAR} := \{ \langle M \rangle \mid \text{ACCEPT}(M) \text{ is regular} \}$
2. $\text{ACCEPTILLINI} := \{ \langle M \rangle \mid M \text{ accepts the string } \text{ILLINI} \}$
3. $\text{ACCEPTPALINDROME} := \{ \langle M \rangle \mid M \text{ accepts at least one palindrome} \}$
4. $\text{ACCEPTTHREE} := \{ \langle M \rangle \mid M \text{ accepts exactly three strings} \}$
5. $\text{ACCEPTUNDECIDABLE} := \{ \langle M \rangle \mid \text{ACCEPT}(M) \text{ is undecidable} \}$

To think about later. Which of the following are undecidable? How would you prove that?

1. $\text{ACCEPT}\{\{\varepsilon\}\} := \{ \langle M \rangle \mid M \text{ accepts only the string } \varepsilon; \text{ that is, } \text{ACCEPT}(M) = \{\varepsilon\} \}$
2. $\text{ACCEPT}\{\emptyset\} := \{ \langle M \rangle \mid M \text{ does not accept any strings; that is, } \text{ACCEPT}(M) = \emptyset \}$
3. $\text{ACCEPT}\emptyset := \{ \langle M \rangle \mid \text{ACCEPT}(M) \text{ is not an acceptable language} \}$
4. $\text{ACCEPT}=\text{REJECT} := \{ \langle M \rangle \mid \text{ACCEPT}(M) = \text{REJECT}(M) \}$
5. $\text{ACCEPT}\neq\text{REJECT} := \{ \langle M \rangle \mid \text{ACCEPT}(M) \neq \text{REJECT}(M) \}$
6. $\text{ACCEPT}\cup\text{REJECT} := \{ \langle M \rangle \mid \text{ACCEPT}(M) \cup \text{REJECT}(M) = \Sigma^* \}$